



Count how many.



Count how many.



Complete the addition problems.

$$4+0=\square$$

$$\begin{array}{r} 1 \\ + 3 \\ \hline \square \end{array}$$

$$2+2=\square$$

$$\begin{array}{r} 3 \\ + 4 \\ \hline \square \end{array}$$

Complete the subtraction problems.

$$\begin{array}{r} 4 \\ - 1 \\ \hline \square \end{array}$$

$$\begin{array}{r} 2 \\ - 0 \\ \hline \square \end{array}$$

$$3 - 0 = \square$$

$$5 - 4 = \square$$

Listen to the story.

Delaney had 7 kittens.


Mason had 1 kitten.

How many kittens did they have all together?

Can you draw a picture to help you solve the problem?

Write the answer in the small box.

Kittens



Listen to the story.

Lillie had 9 stars.


Christopher had 4 stars.

How many stars did they have all together?

Can you draw a picture to help you solve the problem?

Write the answer in the small box.

Stars



Listen to the story.

Emma had 8 hearts.

Keith took 3 hearts away from Emma.

How many hearts does Emma have left?

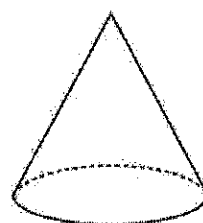
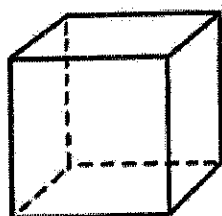


Can you draw a picture to help you solve the problem?

Write the answer in the small box.


Hearts



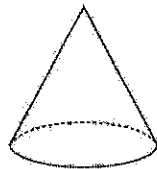
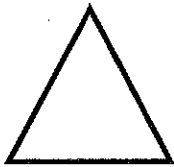
Put an X on the cube. Draw a circle around the cylinder. Draw a line under the cone. Color the sphere.



Underline the 3D shape.



Underline the 3D shape.



Write the numbers from 0-20.

★					